
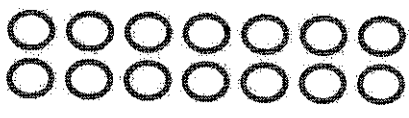



G2-M6-Lesson 20

1. Use the objects to create an array.

	<p>Array</p> <div style="text-align: center;">  </div> <p style="text-align: center;">There are an <u>even</u>/odd (circle one) number of circles.</p>	<p>Redraw your picture with 1 less circle.</p> <div style="text-align: center;">  </div> <p style="text-align: center;">There are an even/<u>odd</u> (circle one) number of circles.</p>
---	---	--

If I draw the array with 1 less circle, there are an odd number of circles. Now, I don't see 2 equal groups of 7.

2. Solve. Tell if each number is odd (O) or even (E).

$$\begin{array}{r} 11 + 13 = \underline{24} \\ O + O = \underline{E} \end{array}$$

I know that 11 and 13 are odd because they do not have 0, 2, 4, 6, or 8 in the ones place. When I add two odd numbers, I get an even number.

3. Write two examples for each case; next to your answer, write if your answers are even or odd.
Add an even number to an odd number.

$$\underline{12 + 7 = 19 \text{ odd}} \quad \underline{8 + 13 = 21 \text{ odd}}$$

I know that when I add an even number and an odd number, the sum will be odd. I cannot make 2 equal groups with 21 tiles, and I can't count by twos to 21.