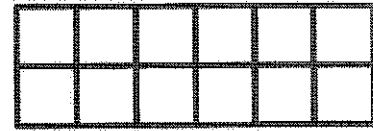
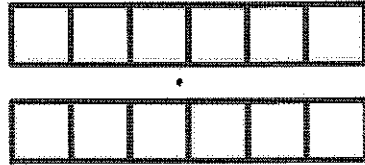


G2-M6-Lesson 14

1. Imagine that you have just cut this rectangle into rows.

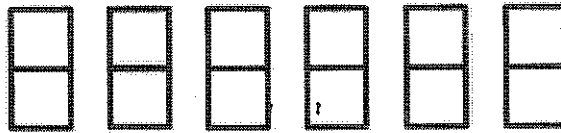
a. What do you see? Draw a picture.



I can decompose the same rectangle into rows and columns. I can see 2 rows of 6.

How many squares are in each row? 6


b. Imagine that you have just cut this rectangle into columns. What do you see? Draw a picture.



How many squares are in each column? 2

I can also see 6 columns of 2.

2. Create another rectangle using the same number of squares.



I can make another rectangle with the same 12 squares. I can rearrange 2 columns of 2 as 1 row of 4. Now, my rectangle has 3 rows of 4.

How many squares are in each row? 4

How many squares are in each column? 3