

G2-M5-Lesson 9

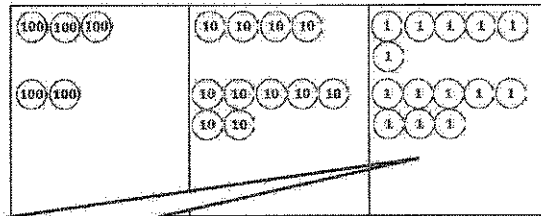
1. Solve the following problems using your place value chart, place value disks, and vertical form. Bundle a ten or hundred when necessary.

$$346 + 278$$

I show each step with the place value disks in the vertical form. When I make a new unit, I show it with new groups below.

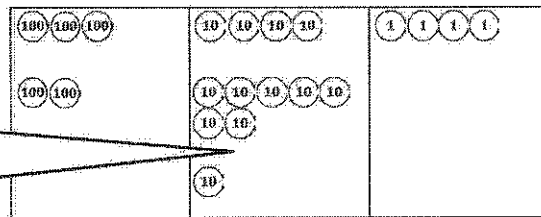
$$\begin{array}{r} 346 \\ + 278 \\ \hline 1 \\ 4 \end{array}$$

When I add the ones, I have 14 ones, or 1 ten 4 ones. I change 10 ones for 1 ten.



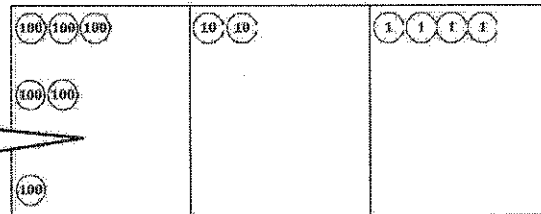
$$\begin{array}{r} 346 \\ + 278 \\ \hline 1 \\ 2 \\ 4 \end{array}$$

Next, I add 4 tens plus 7 tens plus 1 more ten. That's 12 tens, or 1 hundred 2 tens. I change 10 tens for 1 hundred.



$$\begin{array}{r} 346 \\ + 278 \\ \hline 1 \\ 2 \\ 4 \end{array}$$

Now I have 6 hundreds 2 tens 4 ones. $346 + 278 = 624$



2. Solve.

a. $478 + 303 = 781$

$$\begin{array}{r} \wedge \\ 2 301 \end{array}$$

478 is close to 480; it only needs 2 more. I can take 2 from 303 by breaking 303 into 2 and 301 to make an easier problem. $480 + 301 = 781$, so $478 + 303 = 781$.

b. $478 + 323 = 801$

Part (a) helps me solve this problem. 323 is just 20 more than 303, so the answer must be 20 more than 781. I count on 2 tens from 781. 781, 791, 801.